

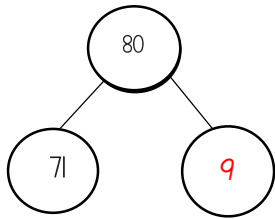
Name: _____

Date: 15.01.21

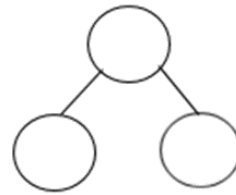
WALT: use the part whole model to answer questions.

Draw the part whole model to answer a mixture of addition problems.

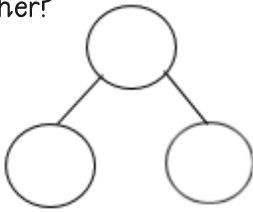
$$71 + \underline{9} = 80$$



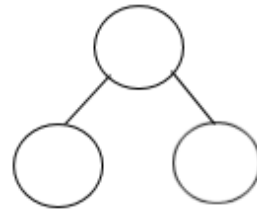
$$62 + \underline{\quad} = 70$$



There are 73 cows. 7 more join them.
How many cows are in the field
altogether?



There are 82 frogs in a pond. 8 more join
them. How many frogs are in the pond
altogether?



There are 111 dogs. 9 more join them.
How many dogs are in the field
altogether?

