


26.02.21

Measurement


WALT: Answer weight word problems.

Read each word problem and write the answer for each one.

My box balances with 18 bricks, my friend's box takes 3 fewer bricks to balance. How many bricks does it take to balance my friend's box?




Choose some different sized objects. Is the largest object always the heaviest? Why? Why not?



A large tin of paint weighs 16 kg. How much does a small tin weigh?



I buy 12kg of dog food. I use half of it. How many kg do I have left?



Which of the boxes looks the heaviest? Which is the heaviest? Find some containers with weights on.



Which symbol $<$ $>$ or $=$ would you put between these objects?

