

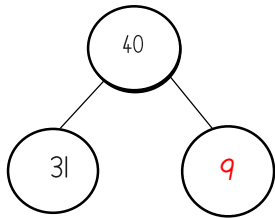
Name: _____

Date: 15.01.21

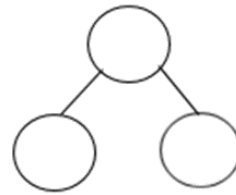
WALT: use the part whole model to answer questions.

Draw the part whole model to answer a mixture of addition problems.

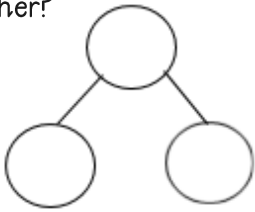
$$31 + \underline{9} = 40$$



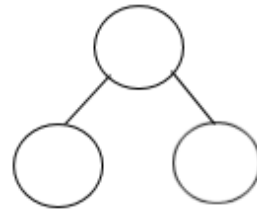
$$57 + \underline{\quad} = 60$$



There are 55 cows. 6 more join them.
How many cows are in the field
altogether?



There are 75 frogs in a pond. 7 more join
them. How many frogs are in the pond
altogether?



There are 88 dogs. 4 more join them.
How many dogs are in the field
altogether?

