

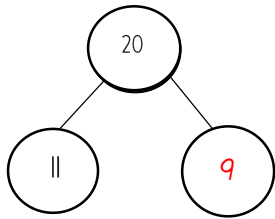
Name: _____

Date: 15.01.21

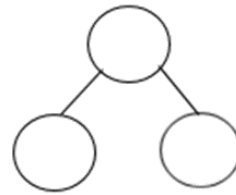
WALT: use the part whole model to answer questions.

Complete the part whole model to answer a mixture of addition problems.

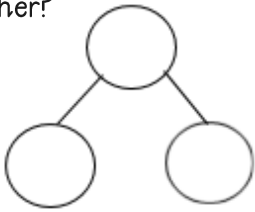
$$11 + \underline{9} = 20$$



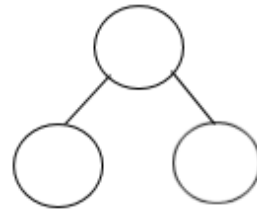
$$17 + \underline{\quad} = 20$$



There are 16 cows. 4 more join them.
How many cows are in the field
altogether?



There are 23 frogs in a pond. 7 more join
them. How many frogs are in the pond
altogether?



There are 26 dogs. 4 more join them.
How many dogs are in the field
altogether?

